

The C Clef

Name: _____ Class: _____ Date: _____




This is a C Clef. It tells you where to find middle C on the staff.




The line through the middle represents middle C.



Any note on this line is middle C.



When the C Clef is around the center line of the staff, it is called the Alto Clef. All notes on the 3rd line of the Alto Clef will be middle C.




A B C D E F etc.

All the other notes on the staff will count up and down alphabetically from middle C.

The Alto Clef

Name: _____ Class: _____ Date: _____



When the C Clef is around the center line of the staff, it is called the alto clef. All notes on the 3rd line will be middle C.



A B C D E F etc.

All the other notes on the staff will count up and down alphabetically from middle C.

Practice writing letter names of notes on the alto staff.

